



**Bharatiya Vidya Bhavan's Atmakuri Rama Rao School  
Road No – 45 (End), Jubilee Hills, Hyderabad-500 013.**

**CLASS- V**  
**SUMMER HOLIDAY HOMEWORK**

**NAME OF THE STUDENT: \_\_\_\_\_ : SECTION: \_\_\_\_\_ : Roll NO : \_\_\_\_\_**

**Dear Students,**

Summer Vacation is probably the best time of the year for you all. It's time for loads of ice cream, time to stay at home and have a good time with your loved ones and getting pampered to no end and of course bonding with cousins .

Summer vacation can also be a time for learning with lots of activities around.

**Dear Parents,**

**The following tips would help your child spend these holidays in a learning way.**

**Inculcate healthy habits-** i.e. getting early in the morning, brushing teeth twice a day, washing hands, drinking lots of water and eating lots of fruits.

**Support moral values-**Wishing everyone (Good Morning) helping parents and grandparents in their regular work, saying prayer in the morning and night etc. Helping needy by giving away spare toys and clothes.

**Nurture the Nature** - Plant a sapling and taking care of it, feeding the birds with water and seeds. Keep your surrounding clean and avoid using plastic poly bags.

**Develop learning skills-**Converse small sentences in English, practice, listen good music and move/dance on the rhythm, practice writing (English & Hindi) daily.

**Personality Development-** Watch less television, save food and water, bath daily and wear neat and clean clothes, don't bite your nails, use hanky/napkin to wipe nose, sweat and hands and speak politely.

Practice the tasks given below for independent learning. Here are few tasks for your ward to be completed during the vacation. Do remember to complete the given tasks after reading them carefully. Submit your work after holidays.

**GUIDELINES FOR THE HOLIDAY HOMEWORK**

- **Label your holiday homework and file it neatly.**
- **All the work should be done on an A4 size sheet.**
- **Revise the syllabus for all the subjects done till now. (April month)**

**Happy Holidays!!**

# Maths

## 1) Solve the puzzles in the given work sheet.

### WORK SHEET

I. Multiply the following and identify the correct answer and write the respective alphabet in the appropriate blank:

- 1.  $492 \times 2$                       2.  $526 \times 7$                       3.  $302 \times 3$                       4.  $685 \times 4$
- 5.  $184 \times 13$                       6.  $813 \times 17$                       7.  $368 \times 41$

<b>A.1,29,869</b>	<b>B.9,872</b>	<b>C.36,841</b>	<b>D.25,718</b>	<b>E.604</b>	<b>F.81,317</b>	<b>G.78,965</b>	<b>H. 3,682</b>
<b>I. 13,821</b>	<b>J.50,174</b>	<b>K. 2,392</b>	<b>L.18,413</b>	<b>M. 68,457</b>	<b>N.15,088</b>	<b>O. 90,581</b>	<b>P.25,576</b>
<b>Q.21,489</b>	<b>R.25,596</b>	<b>S. 2,740</b>	<b>T. 984</b>	<b>U.1,09,968</b>	<b>V.10,000</b>	<b>W.99,999</b>	<b>X.56,997</b>
<b>Y. 93,156</b>	<b>Z.69,187</b>						

A. Which is the biggest organ in our body?

- \_\_\_\_\_
- 1            2            3            4            5            6            7

II. Solve the following and identify the correct answer and write the respective alphabet in the appropriate blank:

- 1.  $59,261 + 50,707$             2.  $2,984 + 0$                       3.  $5,892 - 4,908$
- 4.  $98,243 + 31,626$             5.  $17,809 + 7,767$                 6.  $15,928 + 9,648$
- 7.  $15,755 + 9,841$                 8.  $43,265 + 86,604$                 9.  $34,672 - 8,954$
- 10.  $998 - 394$                       11.  $548 \times 5$                       12.  $9,276 - 5,594$

B. Which state in India has the largest population?

- \_\_\_\_\_
- 1            2            3            4            5            6            7            8            9            10            11            12

2) Dear children watch the video given below carefully and prepare a table-name of the quadrilateral , sides ,vertices ,properties of each quadrilateral in A4 sheet and solve the given worksheet.

<https://youtu.be/CkbClyVxRIU>


## ENGLISH

**ACTIVITY 1:** Design Parts of speech web tree with 3 examples each (8 parts of speech).


**ACTIVITY 2:** Can you spot the errors in the sentences below?

Look for errors of capitalization, punctuation ,spelling and grammar from the given slides.

(Write the answers in an A4 sheet.)



**Qutub Minar**



**Charminar**

Can you spot the error and write the correct degree of comparison

- \*Qutub Minar is the taller minaret in India .
- \* Charminar is smallest than QutubMinar.
- \* Both the monuments are considered as the more beautiful structures .
- \* Charminar has become a symbol of landmark and is listed among the more recognized structures in India.


## Ajanta caves



Can you spot the errors in the sentences below?  
Look for errors of capitalization, punctuation, spelling and grammar.

1. A **ajanta** caves **is** approximately 30 rock cut **buddhist café** monuments.
2. The caves **is** located **from aurangabad** district **off maharastra**.
3. **Thee** caves include paintings or rock cut **sculpters describes** as among the finest surviving **anciant indian** art.
4. The caves, **alsoo presant** painting depicting **tails** from Arjuna Jatakamala.

## Nelson Mandela



Can you spot the action words?

- Miss Mdingane, his primary teacher **give** him the name Nelson.
- He **complete** his BA through the University of South Africa and went back to Fort Hare for his graduation in 1943.
- In 1989, while in the last months of his imprisonment, he **obtain** an LLB through the University of South Africa.



### ACTIVITY 3: Comprehension passages

# Visualization

FICTION

Imagining images of people, places, and events can help to build understanding of a text.

Read the passage.

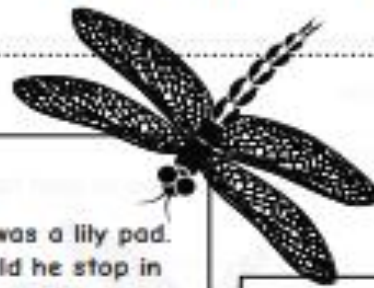
## Caught in the Act

I couldn't believe it. The runway was a lily pad. We were going too fast. How would he stop in time? The lily pad seemed so small. Suddenly, the dragonfly stopped in midair. He hovered over the lily pad and dropped me. Luckily it was a soft landing.

"Do you have any idea how dangerous that was?" I yelled.

The dragonfly said nothing. He flew off, leaving me alone on the lily pad. A small boat, made from a leaf, pulled up to the side of the lily pad.

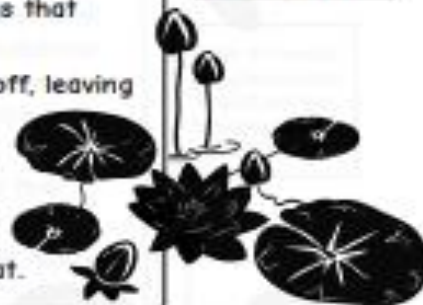
"Are you Troy Cooper?" asked the green beetle who was driving the boat.



Color the words and phrases that helped you see how Troy landed on the lily pad.

Underline the words and phrases that helped you see how the dragonfly approached the runway.

**Highlight** the words and phrases that helped you see how the green beetle arrived at the lily pad.



1 Read the passage again. As you do, visualize what you are reading about.

Draw a picture of the images as you read about the events described in the passage.

Approaching the lily pad

Landing on the lily pad

Meeting the green beetle



# Analyzing character feelings and motivation

Word choice and punctuation can reveal a lot about a character's feelings and what motivates them to behave in a certain way.

Read the passage.



Put a **box** around the narrator's name.

Underline what Samantha said to Lisa.

Circle the punctuation that helps to show that Samantha was angry.

## Buzz, the Computer Man

"If I win the map-a-thon," said Lisa, "I don't want to take Samantha to Wonderland. I want to take Sarah." Sarah is Lisa's best friend.


I couldn't believe that Lisa wouldn't want to take me. She knew how much I wanted to go to Wonderland. I didn't keep it a secret.

"You're the meanest person I know!" I told her. "It would serve you right if someone else won the tickets to Wonderland."

I decided I would do my best to try to win. Then I'd take one of my friends instead of Lisa.

I grabbed her atlas and went to my bedroom to study.

Color how Samantha planned to get back at Lisa.



Circle the correct answers.

- How did Samantha feel when Lisa said she wanted to take Sarah to Wonderland?
  - pleased
  - confused
  - upset
  - excited
- What is a clue to question 1's answer? Samantha accused Lisa of being ...
  - a liar.
  - lazy.
  - a cheat.
  - mean.
- Which punctuation helps to answer question 1?
  - .
  - ,
  - !
  - "
- Why did Samantha decide to study for the map-a-thon? She wanted to ...
  - win the map-a-thon.
  - take one of her friends to Wonderland.
  - help Lisa win.
  - show Lisa how clever she was.

## Social science

At times families have to migrate from one place to another. Some migrate to new cities to

find better jobs or better schools for their children. Sometimes, people are forced to migrate to other places during a war or a flood.

1. Imagine you have moved to a new city with your family. Find out what problems your family faced after migration.

## SCIENCE:

Choose any one habitat, such as a desert, mountains ,or polar region.

- Draw or paste pictures on a chart to show the environment of that habitat.
- Include pictures of biotic and abiotic components habitat.
- Make a food chain showing the living things of that habitat.
- Find out and write about two main threats to the environment of that habitat. How can they be prevented?

## SECOND LANGUAGE

### TELUGU

ఏదైనా ఒక శతకం ఎంచుకుని దానిలోనుండి ఏవేని 5 పద్యాలు వాటి భావాలు రాయండి.

### HINDI

1. Paste any five types of dried flowers on the chart, write about the specialty of the national flower.
2. Cut two advertisements and two articles from the newspaper and paste them in your booklet.



1. किन्हीं पाँच प्रकार के फूलों को सुखाकर चार्ट पर चिपकाइए, राष्ट्रीय फूल की विशेषता के बारे में लिखिए।
2. अखबार से दो विज्ञापन तथा दो आर्टिकल काटकर अपने पुस्तिका में चिपकाए

ENJOY ALL DAYS, VENTURE TO DO  
DIFFERENT ACTIVITIES AND DON'T FORGET  
TO MAKE NEW ADVENTURES